



Noah's Ark Independent Primary School

Subject: Geography	Examiner: Rwizi, A.
Type: Mid-Year Exams	Moderator: Bohner, MA
Date: 25 June 2021	Grade: 6-Buffalo
Marks: 40 Marks	Time: 1 hour

Name: _____

Instructions

Carefully read all the questions before you start writing.

Answer ALL the questions in the spaces provided.

Write neatly and legibly

Question 1

Use the words in the box below to complete the sentences which follow: (6)

fair	manufactured	north	east	services
money	west	words	numbers	raw

- 1.1 The cocoa beans are the _____ material for chocolate.
- 1.2 A line of longitude always lies _____ or _____ of the Greenwich Meridian.
- 1.3 A word scale just says what the scale is in _____.
- 1.4 People who do not make things provide _____, such as nurses and teacher.

Question 2

2.1 Arrange these scales in order from the smallest to the largest. (3)

1:1 000

1:50 000 000

1:50 000

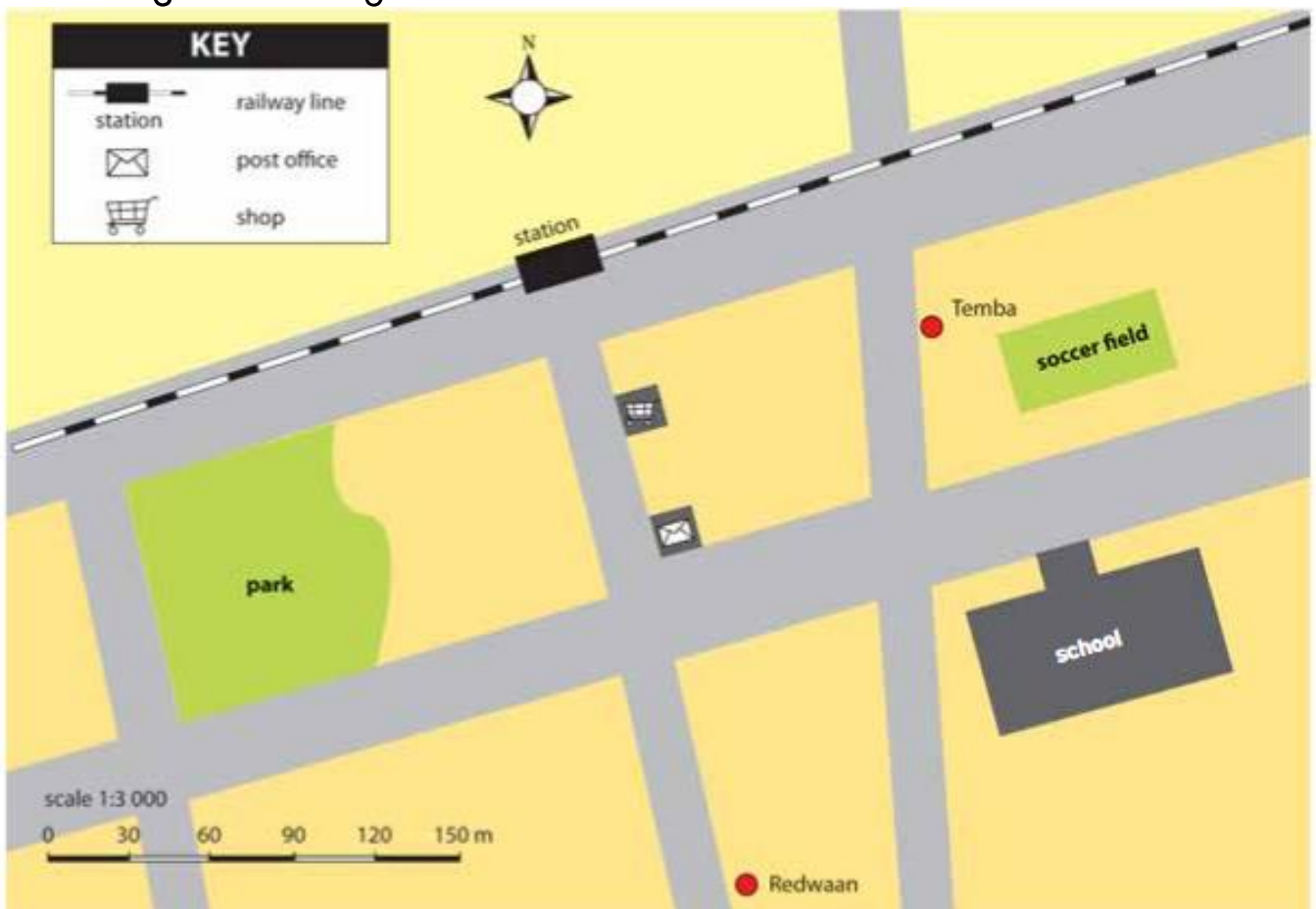
1:100 000

1:50


1:10 000

2.2 Which scale in Question 2.1 would be best to use for a map of your street? (1)

2.3 Use the map below to calculate the length of the soccer field. Clearly show your working. (3)



Word scale: Every centimetre on the map is equal to 30 metres in real life.

Line scale: 

Question 3

Use the contents page on the atlas below to answer the question which follow.

ACTIVE LEARNING Intermediate Phase Atlas for SOUTH AFRICA

Contents

How to use this Atlas	2	South Africa North West	31
Our National Symbols	3	South Africa The history of my province – Western Cape	32
Map Skills	4	South Africa Western Cape	33
Our planet Earth	4	South Africa The history of transport and travel	34
Showing our planet Earth on paper	5	South Africa Political	35
The features of a map	6-7	South Africa Physical features	36
Where in the world?	8	South Africa Water resources	37
Where on a map?	9	South Africa Natural vegetation	38
Latitude and longitude	10	South Africa Climate and the environment	39
Map co-ordinates	11	South Africa Rainfall	40
South Africa and Southern Africa	12	South Africa Temperatures	41
South Africa The history of my area	12	South Africa Food production	42-44
South Africa Cape Town	13	South Africa Mining	45
South Africa Kimberley	14	South Africa Manufacturing and energy	46
South Africa Himeville	15	South Africa Health and welfare	47
South Africa The history of my province – Eastern Cape	16	South Africa Population	48-49
South Africa Eastern Cape	17	Southern Africa Early societies until 1600	50
South Africa The history of my province – Free State	18	Southern Africa Kingdoms	51
South Africa Free State	19	Africa	52
South Africa The history of my province – Gauteng	20	Early African and world civilisations	52-53
South Africa Gauteng	21	Early maps of Africa	54
South Africa The history of my province – KwaZulu-Natal	22	Africa Political	55
South Africa KwaZulu-Natal	23	Africa Physical features	56
South Africa The history of my province – Limpopo	24	World	57
South Africa Limpopo	25	World Voyages of exploration	57
South Africa The history of my province – Mpumalanga	26	World Political	58-59
South Africa Mpumalanga	27	World Physical features	60-61
South Africa The history of my province – Northern Cape	28	World Wet and dry lands	62
South Africa Northern Cape	29	World Warm and cold lands	63
South Africa The history of my province – North West	30	World Natural vegetation	64-65
		World Population	66-67
		World Trade and development	68-69
		Index	70

3.1 On which page would you find information about:

a) rainfall in South Africa: _____ (1)

b) where Mount Kilimanjaro in Africa is located: _____ (1)

3.2 List the following information in the correct order in which you would find it: (1)

world	Africa	map skills
-------	--------	------------

1 _____ ; 2 _____ ; 3 _____

Question 4

Explain the following terms

4.1 contents page: (2)

4.2 primary products: (2)

Question 5

In a single paragraph explain what happens when trade is unfair. (5)

Question 6

Look at photographs A and B below



Photograph A



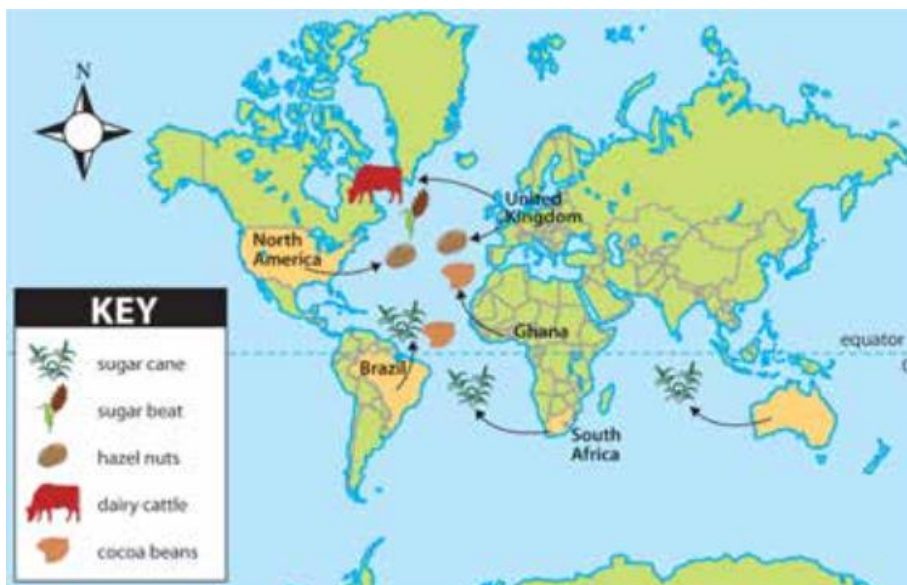
Photograph B

Source 3: Platinum Grade 6 Social Science Learner's Book, page 46

- 6.1 Which photograph shows a worker making manufactured products? _____ (1)
- 6.2 Which photograph shows a person who works with raw materials? _____ (1)
- 6.3 Are the people making products for export or import? _____ (1)

Question 7

Use the map and the case study below to answer the questions which follow:



Source 4: Study & Master Grade 6 Social Science Learner's Book, page 44

Case study: Growing cocoa in Ghana

Cocoa trees grow in warm climates near the equator. Most of the world's cocoa comes from west Africa. Ghana is a country in west Africa that produces about 15% of the world's cocoa beans.

Ghana exports cocoa beans to companies in Europe. These companies process the cocoa beans into chocolate. When you buy a slab of chocolate, most of the money goes to the country



Ghana in West Africa produces 15% of the world's cocoa beans.

that manufactured the chocolate. Only a small amount of money goes to the country that produced the raw cocoa.

Source 5: Platinum Grade 6 Social Science Learner's Book, page 37

7.1 Give two examples of raw materials used to make chocolate. (4)

7.2 Explain why chocolate is more valuable than cocoa beans. (4)

7.3 Suggest two ways in which Ghana can make more money from raw materials. (4)

a) _____

b) _____

____ / 40 Marks TOTAL